




Name: _____

1.MD.B.3




Valen-time


Draw the correct time on each clock.




3:00




7:00




1:00




11:00



4:00



9:00



6:00



10:00



12:00