

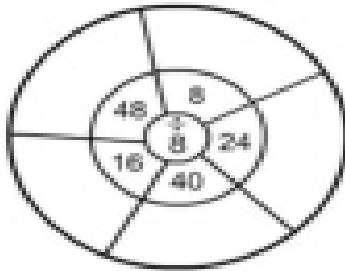
Name: _____

Date: _____

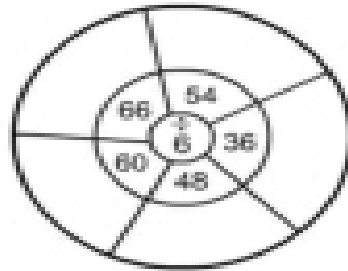
Division Facts

Divide the numbers by the center number and write the answer.

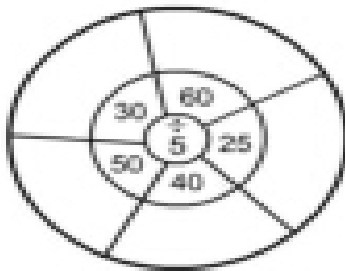
1.



2.



3.



4.

