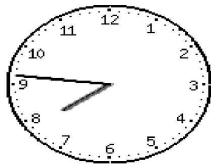


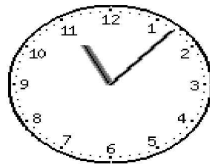
# Clock Worksheet

Write the time to the nearest 5 minutes



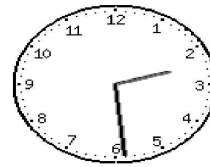
1a

\_\_\_ : \_\_\_



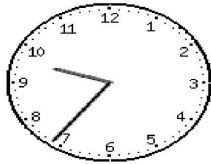
1b

\_\_\_ : \_\_\_



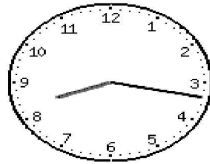
1c

\_\_\_ : \_\_\_



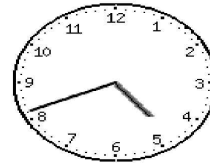
2a

\_\_\_ : \_\_\_



2b

\_\_\_ : \_\_\_



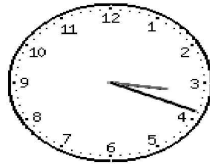
2c

\_\_\_ : \_\_\_



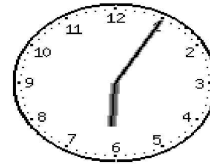
3a

\_\_\_ : \_\_\_



3b

\_\_\_ : \_\_\_



3c

\_\_\_ : \_\_\_