







Name: _____

1. Circle the correct numbers.

5  nine <input checked="" type="radio"/> five	<input type="checkbox"/>  three <input type="checkbox"/> five	<input type="checkbox"/>  five <input type="checkbox"/> nine
<input type="checkbox"/>  ten <input type="checkbox"/> two	<input type="checkbox"/>  three <input type="checkbox"/> five	<input type="checkbox"/>  five <input type="checkbox"/> four

2. Write the missing numbers.

