

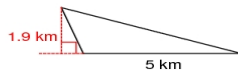
### Area of Triangles

Find the area of each.

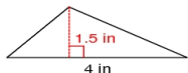
1)



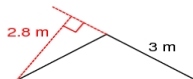
2)



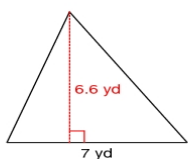
3)



4)



5)



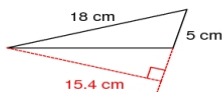
6)



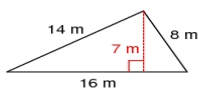
7)



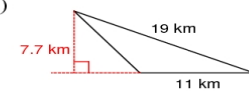
8)



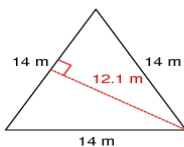
9)



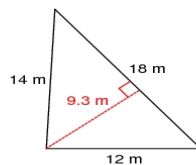
10)



11)



12)



13)



14)

