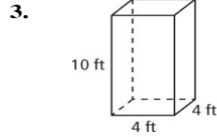
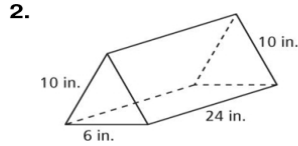
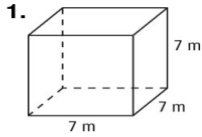


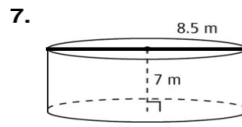
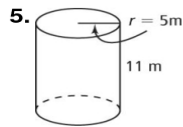
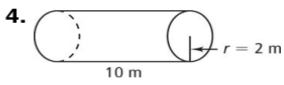
Chapter 11 Review Worksheet

Practice G – Edit

Use formulas to find the surface area and volume of each prism. Round your answer to the nearest whole number.



Find the Surface area and volume of each cylinder to the nearest whole number.



**Extra - 8.** A box of cereal measures 8 in. wide, 11 in. high, and 2 in. deep. If all surfaces are made of cardboard and the total amount of overlapping cardboard in the box is  $7 \text{ in}^2$ , how much cardboard is used to make the cereal box?

Find the surface area and volume of each pyramid to the nearest whole number.

