

Name : _____

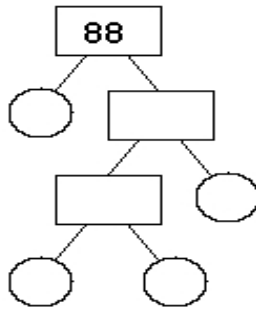
Score : _____

Teacher : _____

Date : _____

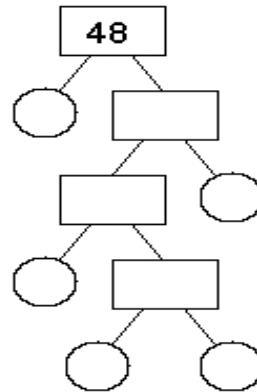
Find the Prime Factors of the Numbers

1)



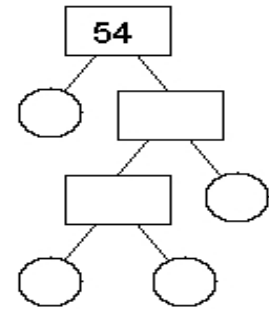
Prime Factors
_ x _ x _ x _ = 88

2)



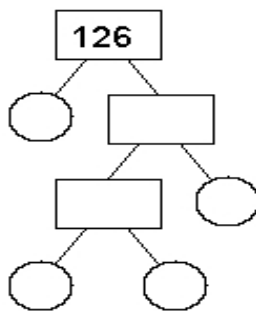
Prime Factors
_ x _ x _ x _ x _ = 48

3)



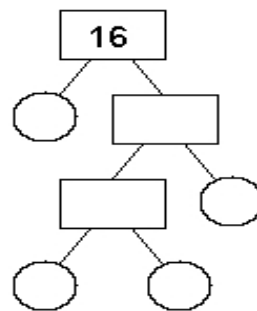
Prime Factors
_ x _ x _ x _ = 54

4)



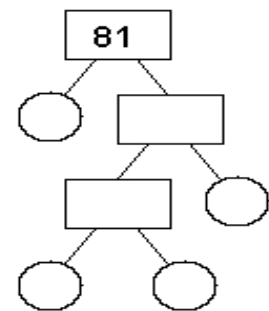
Prime Factors
_ x _ x _ x _ = 126

5)



Prime Factors
_ x _ x _ x _ = 16

6)



Prime Factors
_ x _ x _ x _ = 81