

Name : _____

Score : _____

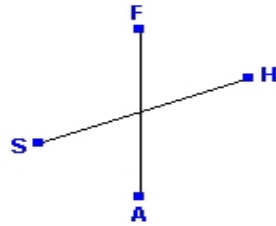
Teacher : _____

Date : _____

Parallel Lines

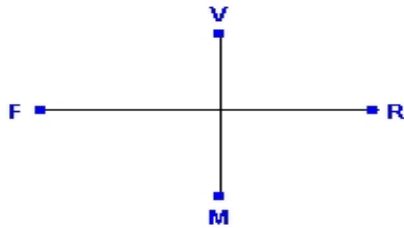
State whether the given pair of lines are parallel.

1)




Answer: _____

2)



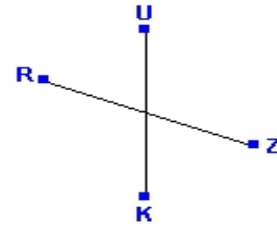
Answer: _____

3)



Answer: _____

4)




Answer: _____

5)



Answer: _____

6)



Answer: _____

