


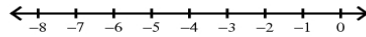
**Multi-Step Inequalities**

**Solve each inequality and graph its solution.**

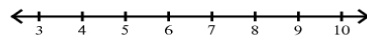
1)  $-3x + 2x \leq 6$



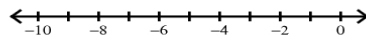
2)  $3 - 6n - 4 < 17$



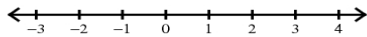
3)  $n - 3 + 4 > 7$



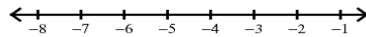
4)  $0 < n - 1 + 6$




5)  $-3x - 2x < 5$



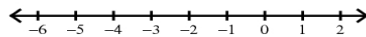
6)  $-(2 + 2m) - 2 > 6$



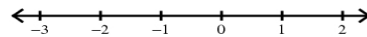
7)  $-9 \geq -8(1 + 6v) - 1$



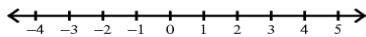
8)  $8(1 - 4x) > 40$



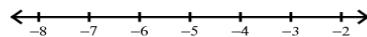
9)  $4(8 - 2b) - 2b \leq 32$



10)  $5x - 7(x + 1) > -9$



11)  $-p + 6p \leq 4 + 6p$



12)  $5 + 4x \geq x + 8$

