

Name _____

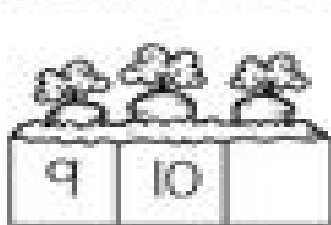
Date _____

Missing Number Math

Fill in the blank with the missing number



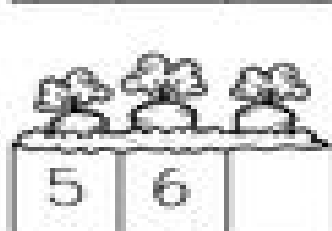
1 2



9 10




4 5




5 6



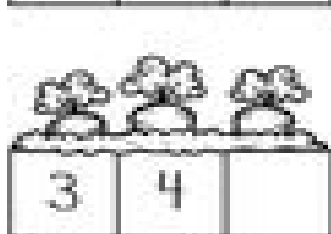
12 13




8 9



17 18



3 4



14 15



11 12



6 7



18 19