

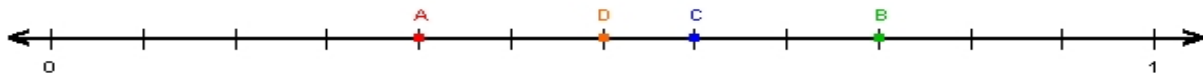
Name : _____

Score : _____

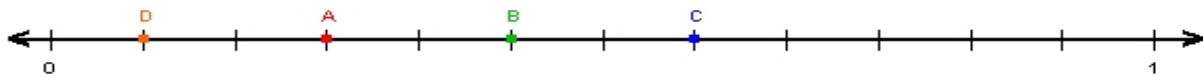
Teacher : _____

Date : _____

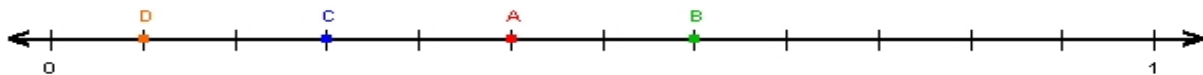
Fractions on Number Lines



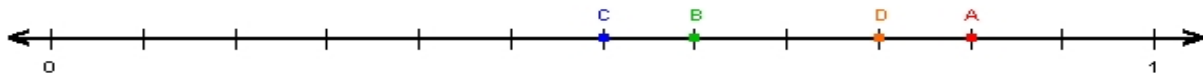
A = _____ B = _____ C = _____ D = _____



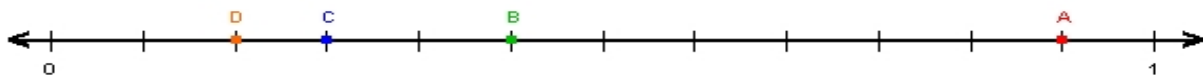
A = _____ B = _____ C = _____ D = _____



A = _____ B = _____ C = _____ D = _____



A = _____ B = _____ C = _____ D = _____



A = _____ B = _____ C = _____ D = _____