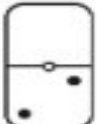


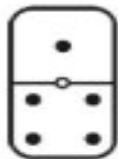
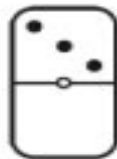
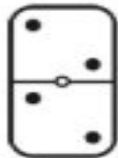
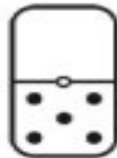
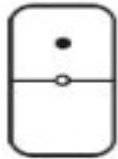
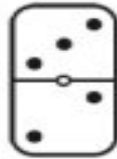
## Domino Dot Addition

Worksheet 1

Write an addition equation to represent the dots in the top section and the dots in the bottom section of each domino.

Example.   $\overset{\text{Dots in top section.}}{0} + \underset{\text{Dots in bottom section.}}{2} = \overset{\text{Total of all dots.}}{2}$

---

  
\_\_\_\_ + \_\_\_\_ = \_\_\_\_  
\_\_\_\_ + \_\_\_\_ = \_\_\_\_  
\_\_\_\_ + \_\_\_\_ = \_\_\_\_  
\_\_\_\_ + \_\_\_\_ = \_\_\_\_  
\_\_\_\_ + \_\_\_\_ = \_\_\_\_  
\_\_\_\_ + \_\_\_\_ = \_\_\_\_