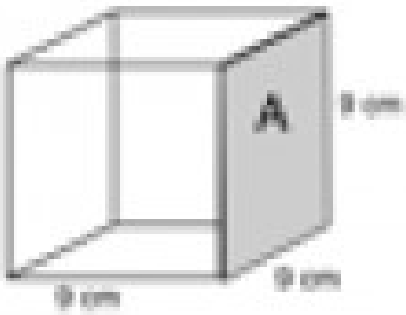



Directions: Find the area and the volume for each shape below.




The area of side A = _____ cm^2

The volume of the cube = _____ cm^3



The area of side B = _____ mm^2

The volume of the pyramid = _____ mm^3



The area of side C = _____ ft^2

The bathroom floor has a length of 14 ft and a width of 13 feet. What is the area of the bathroom floor?

The area of the bathroom floor is _____

A box has a length of 54 inches, a height of 17 inches, and a width of 32 inches. What is the volume of the box?

The volume of the box is _____