

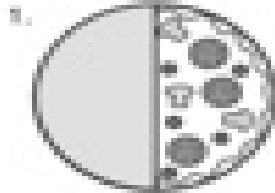
Name \_\_\_\_\_

Fractions  
Identifying parts of a whole

### Pizza Pete

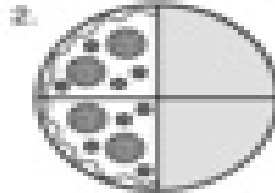
Write a matching fraction on each line.

I ate  $\frac{1}{2}$   
I left  $\frac{1}{2}$




Pete ate \_\_\_\_\_

He left \_\_\_\_\_



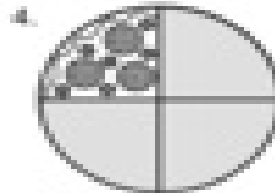
Pete ate \_\_\_\_\_

He left \_\_\_\_\_



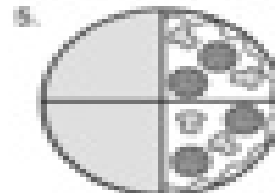
Pete ate \_\_\_\_\_

He left \_\_\_\_\_




Pete ate \_\_\_\_\_

He left \_\_\_\_\_




Pete ate \_\_\_\_\_

He left \_\_\_\_\_




Pete ate \_\_\_\_\_

He left \_\_\_\_\_



Pete ate \_\_\_\_\_

He left \_\_\_\_\_



Pete ate \_\_\_\_\_

He left \_\_\_\_\_