


Name _____

Adding to 18—
doubles











Not Far From Home











Start at . Write the number of steps. Add.

steps to + steps home = _____ steps

steps to + steps home = _____ steps

 7	+	 7	=	14
	+		=	_____
	+		=	_____
	+		=	_____

	+		=	_____
	+		=	_____
	+		=	_____
	+		=	_____