







Name _____

Decomposing Numbers

Draw spots on the each side of the ladybugs to show ways to make each number.

 <input type="text"/> + <input type="text"/> = 4	 <input type="text"/> + <input type="text"/> = 6
 <input type="text"/> + <input type="text"/> = 8	 <input type="text"/> + <input type="text"/> = 5
 <input type="text"/> + <input type="text"/> = 10	 <input type="text"/> + <input type="text"/> = 7

©2009 by [Henry Ford](http://www.henryford.com)

www.henryford.com www.henryford.com