











Counting 10–20

Directions: Count how many objects are in each set. Write the number in the box.

<p>1. </p> <p style="text-align: right;">□</p>	<p>6. </p> <p style="text-align: right;">□</p>
<p>2. </p> <p style="text-align: right;">□</p>	<p>7. </p> <p style="text-align: right;">□</p>
<p>3. </p> <p style="text-align: right;">□</p>	<p>8. </p> <p style="text-align: right;">□</p>
<p>4. </p> <p style="text-align: right;">□</p>	<p>9. </p> <p style="text-align: right;">□</p>
<p>5. </p> <p style="text-align: right;">□</p>	<p>10. </p> <p style="text-align: right;">□</p>