


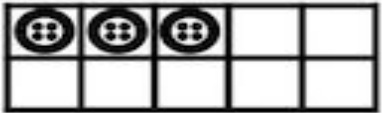





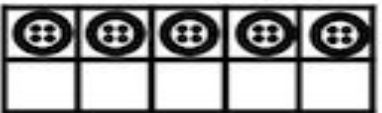

K.O.A.A.4

Name: _____

Make 10 with Cool Cat!



Count how many more to make 10.
Write the number to make 10.

| | | |
|---|---|---|
|  $6 + \square = 10$ |  $3 + \square = 10$ |  $8 + \square = 10$ |
|  $4 + \square = 10$ |  |  $2 + \square = 10$ |
|  $7 + \square = 10$ |  $5 + \square = 10$ |  $9 + \square = 10$ |