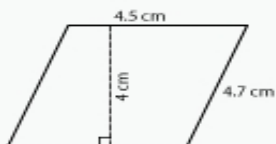


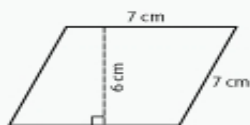
Area of a Parallelogram

Name: _____ Class: _____

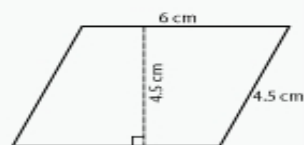
Find the area of the following parallelograms (not to scale).



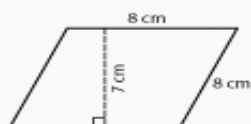
Area: _____



Area: _____



Area: _____



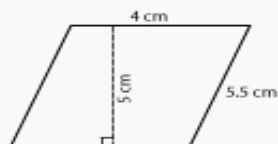
Area: _____



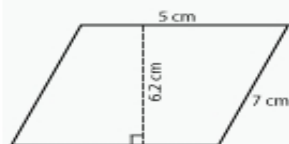
Area: _____



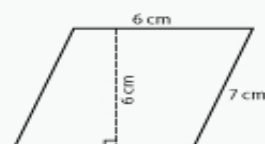
Area: _____



Area: _____



Area: _____



Area: _____