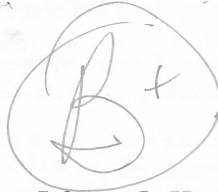



Rachel
Wright


1 26
- 3

#1. Which one is the movement or motion of one object around another object?

- a. ~~Rotation~~
- b. ~~Revolution~~
- c. Orbit



= 89%



#2. Which one is the path an object follows around another object?

- a. ~~Rotation~~
- b. Revolution
- c. ~~Orbit~~

#3. Which one is a spinning motion around an axis?

- a. Rotation
- b. ~~Revolution~~
- c. ~~Orbit~~

#4. Which one is the line around which an object spins?

- a. Rotation Axis
- b. ~~Revolution~~
- c. ~~Orbit~~

#5. Which way does the Earth spin around its axis?

- a. ~~Clockwise~~
- b. Counter-clockwise

#6. It takes the Earth how long to spin once around its axis?

- a. ~~One year~~
- b. ~~One month~~
- c. 24 Hours

2