



Complete.




$6 + 2 = \underline{\quad}$



$7 + 3 = \underline{\quad}$

$8 + 3 = \underline{\quad}$

$9 + 4 = \underline{\quad}$



$6 - 4 = \underline{\quad}$



$11 - 3 = \underline{\quad}$

$7 - 4 = \underline{\quad}$

$12 - 5 = \underline{\quad}$