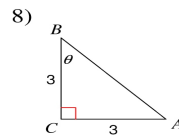
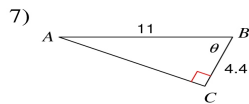
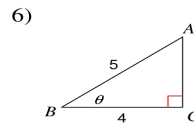
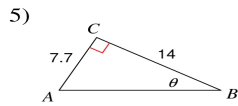
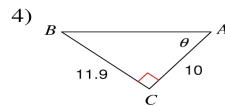
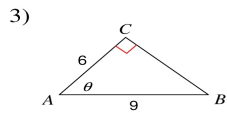
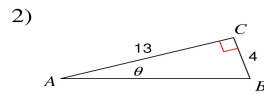
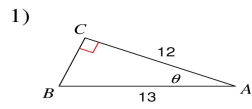


Find the measure of each angle indicated. Round to the nearest tenth.



Find the measure of each side indicated. Round to the nearest tenth.

