

Name \_\_\_\_\_

Temperature

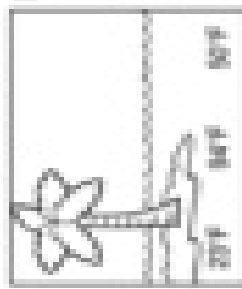
Choosing a reasonable temperature

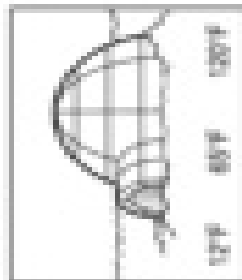
## A Moose for All Seasons

Fill in the missing numbers on the thermometers.


Hint: Count by tens.


Circle the best temperature for each picture.

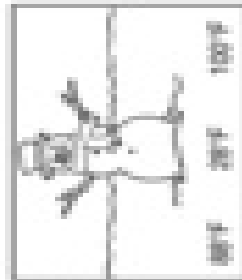
A.  20°F   80°F   50°F


B.  12°F   60°F   100°F


C.  70°F   20°F   100°F


D.  60°F   20°F   110°F

E.  100°F   50°F   50°F

F.  80°F   20°F   100°F

G.  210°F   30°F   100°F

H.  20°F   100°F   70°F

I.  60°F   40°F   100°F



Answer: Which season is your favorite? Write about it. As you write, describe the items of clothing you wear during the season.