




Name: _____


Can you tell the time to the nearest 5 minutes?
Worksheet 2

1




8:15

2



10:00

3




7:05

4



5




6:10

6



7




12:45

8




9




3:50

10




8:45

11



10:00

12



8:30