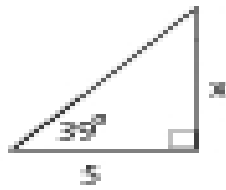


Algebra 1 Worksheet

Name \_\_\_\_\_

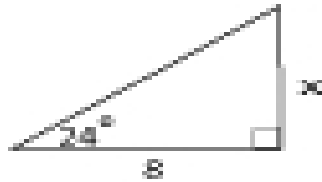
Find the missing side.  
Round to the nearest tenth.

1.



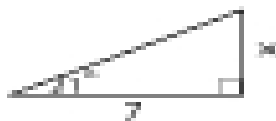
Answer: \_\_\_\_\_

2.



Answer: \_\_\_\_\_

3.



Answer: \_\_\_\_\_

4.



Answer: \_\_\_\_\_