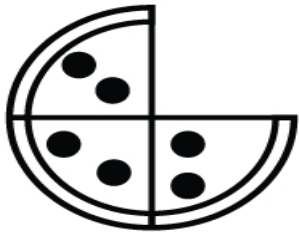


Elementary Math Worksheet  
2nd Grade Math Worksheet  
Learning Fractions

NAME \_\_\_\_\_


Circle the correct fraction that shows how many pizza slices are gone.



$\frac{1}{3}$

$\frac{1}{4}$


$\frac{1}{5}$



$\frac{1}{3}$

$\frac{1}{4}$

$\frac{1}{5}$



$\frac{2}{5}$

$\frac{2}{6}$

$\frac{2}{8}$

