

CHECK YOUR PROGRESS  
 SCHOOL \_\_\_\_\_  
 NAME \_\_\_\_\_

DATE \_\_\_\_\_  
 SUBJECT: MATHEMATICS  
 GRADE \_\_\_\_\_

DATE \_\_\_\_\_  
 TEACHER \_\_\_\_\_  
 GRADE \_\_\_\_\_




10) Read the first story in each. Then complete the sentence with the correct names or positions.

Joe is the Champion (Harry is third, and Carl is in fifth position). Peter is fourth position (Bob is between Joe and Harry). Anne is in front of Peter. Dave is behind Carl and in front of Bob. Ted is between Harry and Carl, and Don is behind Bob.

Write the name of the runner in the blank space.


	1. _____ is first		6. _____ is sixth
	2. _____ is second		7. _____ is seventh
	3. Harry is _____		8. _____ is eighth
	4. _____ is fourth		9. Dave is _____
	5. Carl is _____		10. _____ is tenth



11) Write the numbers in figures.


1000 - 500 = 500	11 hundred = 1100	20 hundred = 2000	20 hundred = 2000	Twenty - three = 23
7 hundred = 700	40 thirty = 1200	7 hundred = 700	Eighty - four = 84	Twenty - eight = 28

12) See the first runner in the picture.



1000
1000
1000
1000
1000
1000

13) Circle the number you get in the first group to get.

 1000	 1000	 1000	 1000	 1000	 1100	 1000	 1000	 1100	 1100
--	--	--	--	--	--	---	--	--	--