




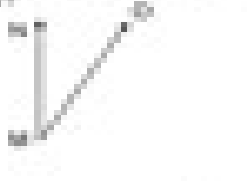


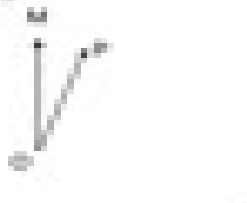


Name: _____

Measuring Angles

Directions: Find the measurement of each angle.

<p>What is the measurement of \angle FGH?</p>  <p>_____ °</p>	<p>What is the measurement of \angle DBC?</p>  <p>_____ °</p>	<p>What is the measurement of \angle XYZ?</p>  <p>_____ °</p>
<p>What is the measurement of \angle PQR?</p>  <p>_____ °</p>	<p>What is the measurement of \angle TUV?</p>  <p>_____ °</p>	<p>What is the measurement of \angle WXY?</p>  <p>_____ °</p>
<p>What is the measurement of \angle ZAB?</p>  <p>_____ °</p>	<p>What is the measurement of \angle CDE?</p>  <p>_____ °</p>	<p>What is the measurement of \angle FGH?</p>  <p>_____ °</p>