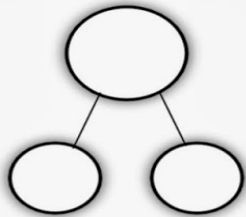


Fact Families

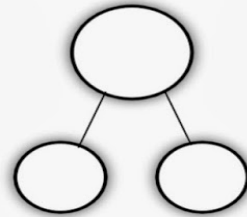
Name: _____

1.



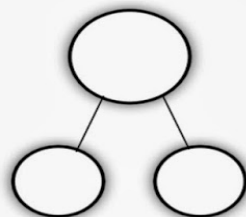
$$\begin{array}{rcl} ____ + ____ & = & ____ \\ ____ + ____ & = & ____ \\ ____ - ____ & = & ____ \\ ____ - ____ & = & ____ \end{array}$$

2.



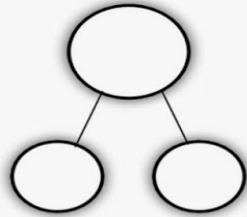
$$\begin{array}{rcl} ____ + ____ & = & ____ \\ ____ + ____ & = & ____ \\ ____ - ____ & = & ____ \\ ____ - ____ & = & ____ \end{array}$$

3.



$$\begin{array}{rcl} ____ + ____ & = & ____ \\ ____ + ____ & = & ____ \\ ____ - ____ & = & ____ \\ ____ - ____ & = & ____ \end{array}$$

4.



$$\begin{array}{rcl} ____ + ____ & = & ____ \\ ____ + ____ & = & ____ \\ ____ - ____ & = & ____ \\ ____ - ____ & = & ____ \end{array}$$