



Name _____

Fractions


Parts of a whole

Pass the Butter, Please!

Circle the fraction for the shaded part.



$\frac{1}{3}$ $\frac{2}{3}$




$\frac{3}{5}$ $\frac{2}{5}$




$\frac{1}{4}$ $\frac{3}{4}$




$\frac{1}{2}$ $\frac{2}{2}$



$\frac{4}{7}$ $\frac{3}{7}$




$\frac{2}{4}$ $\frac{3}{4}$



$\frac{4}{6}$ $\frac{2}{6}$



$\frac{7}{10}$ $\frac{3}{10}$




$\frac{6}{8}$ $\frac{2}{8}$




$\frac{3}{4}$ $\frac{1}{4}$




$\frac{1}{3}$ $\frac{3}{3}$




$\frac{1}{5}$ $\frac{4}{5}$



$\frac{4}{10}$ $\frac{6}{10}$



$\frac{3}{10}$ $\frac{7}{10}$



$\frac{3}{7}$ $\frac{4}{7}$