

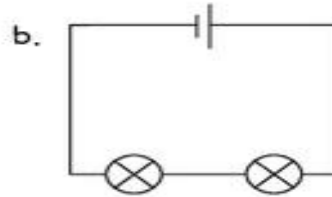
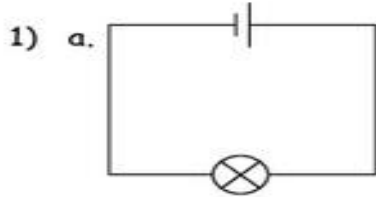
Score

3

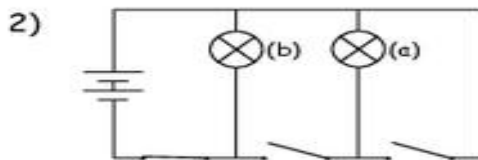
06-03-07-009-s

Name: \_\_\_\_\_ Subject: Year 6 Science  
Date: \_\_\_\_\_ Unit: 6g Changing circuits

Look at the circuits below and answer the questions:

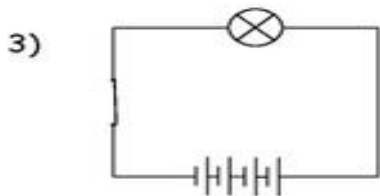


Which diagram would produce the brightest bulb? \_\_\_\_\_



Which bulb in this circuit would light up? \_\_\_\_\_  
Why would the other bulb not light up?

\_\_\_\_\_  
\_\_\_\_\_



What would happen to the bulb in this circuit? \_\_\_\_\_

\_\_\_\_\_  
\_\_\_\_\_