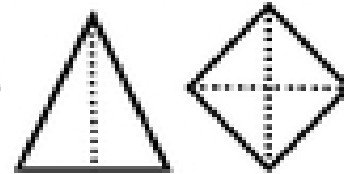



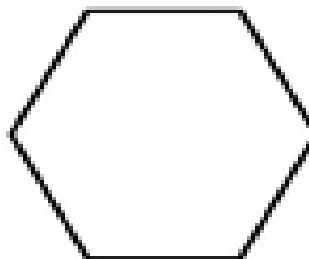
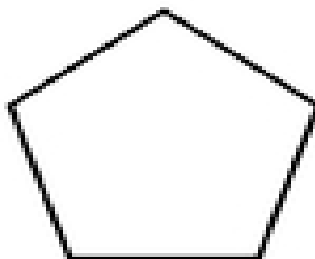


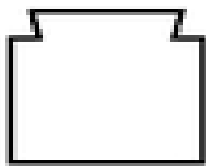
Name _____ Date _____

Lines of Symmetry:

Lines of symmetry exist when the sides of an object, lying on each side of a line drawn across it, are mirror images of each other



Draw the line(s) of symmetry for each of the figures below.
Each shape may have none, one, a few, or many lines of symmetry.



© abcteach.com