

Score


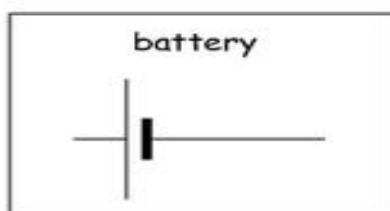
4

02-03-06-006-s

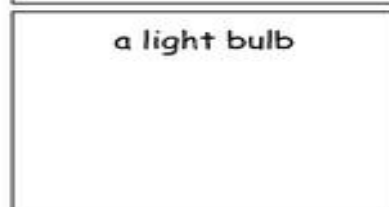
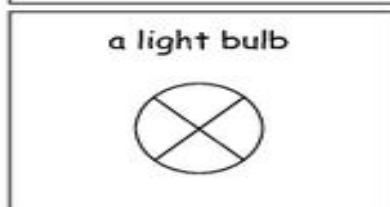
Name: \_\_\_\_\_ Subject: Year 2 Science  
Date: \_\_\_\_\_ Unit: 2f Using electricity

To draw electric circuits we use symbols. Look at the symbols below and draw them in the space provided:

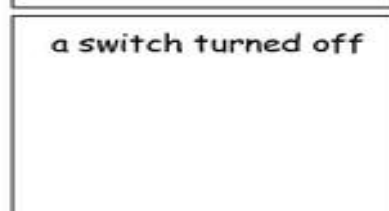
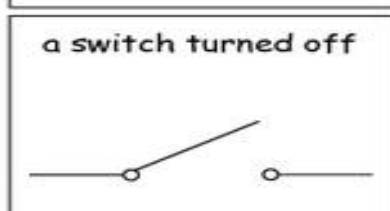
1)



2)



3)



4)

