



# Fraction models



Write the missing numbers to show what part is shaded.



$$\frac{\text{3 shaded parts}}{\text{4 parts}} = \frac{3}{4}$$



$$\frac{4}{4} = 1 \text{ and } \frac{3}{4} = \frac{1}{2}$$

So, shaded part =  $1\frac{1}{2}$

Write the missing numbers to show what part is shaded.



Write the fraction for the part that is shaded.



$$\frac{8}{12} \text{ or } \frac{2}{3}$$



$$\frac{2}{3} \text{ or } \frac{2}{3}$$




$$\frac{1}{3} \text{ or } \frac{1}{3}$$

Write the fraction for the part that is shaded.



$$\frac{3}{6} \text{ or } \frac{1}{2}$$



$$\frac{3}{6} \text{ or } \frac{1}{2}$$



$$\frac{3}{6}$$