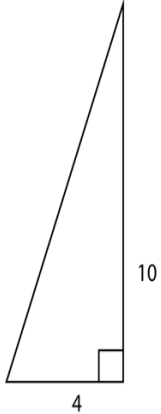
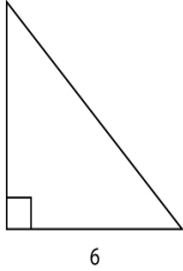
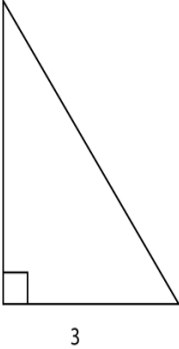

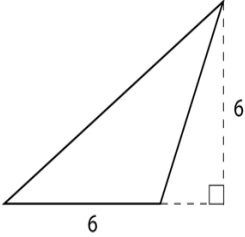
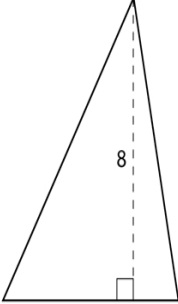
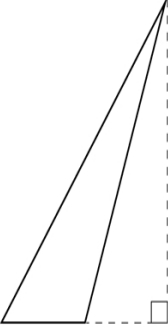
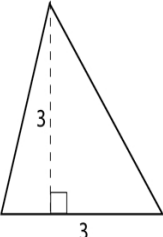


Name _____ Date _____

Area of a Triangle Practice

Directions: Find the area of the triangles below.

<p>①</p>  <p>_____ square units</p>	<p>②</p>  <p>_____ square units</p>	<p>③</p>  <p>_____ square units</p>	<p>④</p>  <p>_____ square units</p>
<p>⑤</p>  <p>_____ square units</p>	<p>⑥</p>  <p>_____ square units</p>	<p>⑦</p>  <p>_____ square units</p>	<p>⑧</p>  <p>_____ square units</p>