



What's the time?


Draw the hands on the clocks




It's a quarter past twelve.




It's a quarter to four.




It's a quarter to ten.




It's a quarter past one.




It's a quarter to nine.




It's a quarter past six.




It's a quarter past five.




It's a quarter to seven.




It's a quarter to three.



It's a quarter to eleven.



It's a quarter past ten.



It's a quarter past eight.