

Name \_\_\_\_\_

Place Value

Tens and ones to 50

# Gathering Eggs

Write how many tens and ones.








Write the number.

**Key**

 = 1 egg     = 10 eggs



**Beetle!** Use the key to show the number 25. Write the number of tens and ones.

<p>A. </p>	tens	ones	_____
<p>B. </p>	tens	ones	_____
<p>C. </p>	tens	ones	_____
<p>D. </p>	tens	ones	_____
<p>E. </p>	tens	ones	_____
<p>F. </p>	tens	ones	_____
<p>G. </p>	tens	ones	_____