




Name _____

3  s. 1  fell off. Subtract the  s. How many  s are left?



$$\begin{array}{r}
 3 \text{  s \\
 - 1 \text{  s \\
 \hline
 \end{array}$$