

## LIVING AND NON-LIVING THINGS

NAME: \_\_\_\_\_

Directions: Classify whether the picture shows a living or non-living thing. Mark the correct answer.




Living      non-living



Living      non-living




Living      non-living




Living      non-living




Living      non-living



Living      non-living



Living      non-living



Living      non-living



Living      non-living



Living      non-living