










<b>BEFORE - AFTER - BEFORE</b>			
<b>BEFORE</b>			
<b>Task 1   The magnitude of the angle</b>			
			
90°	90°	90°	
<b>AFTER</b>			
<b>Task 2   The distance from the center</b>			
			
90°	90°	90°	
<b>BE TANGENT</b>			
<b>Task 3   The radius between the points and the center</b>			
			
90°	90°	90°	
<b>BEFORE - AFTER</b>			

Copyright © 2016 by Edmentum - All rights reserved.