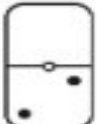
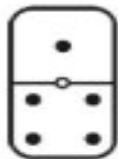
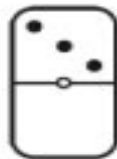
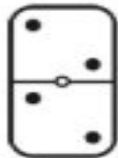
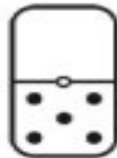
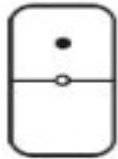
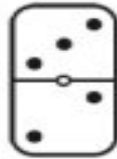


Domino Dot Addition

Worksheet 1

Write an addition equation to represent the dots in the top section and the dots in the bottom section of each domino.

Example.  $\overset{\text{Dots in top section.}}{0} + \underset{\text{Dots in bottom section.}}{2} = \underset{\text{Total of all dots.}}{2}$


____ + ____ = ____
____ + ____ = ____
____ + ____ = ____
____ + ____ = ____
____ + ____ = ____
____ + ____ = ____