




Name _____

Evaluating algebraic expressions

What Seeds Are Sproutin'?

Use the value of the given variable to evaluate each expression. Then write the name of the correct flower. The first one has been done for you.



$$1. \begin{aligned} 6x + 7x - 2 \\ 6x + 7x - 2 \\ 12x - 2 \\ 90 \end{aligned}$$

Sunflower

$$2. 40 + 6$$

$$3. 7x$$



$$4. 73 - x$$

$$5. 68 + 4 - 3$$

$$6. 35 + x$$



$$7. 3y$$

$$8. 2y - 2$$

$$9. y + 2$$



$$10. 72 + w$$

$$11. (w - 3) + 12$$

$$12. 5 + (w - 2)$$
