





# Counting back



Count back to find out on which step the frog jumps.



Write the missing numbers in the boxes.

$3 - 3 = \boxed{0}$

$20 - 10 = \boxed{\phantom{00}}$

$9 - \boxed{\phantom{00}} = 6$

$15 - \boxed{\phantom{00}} = 5$

$5 - 4 = \boxed{\phantom{00}}$

$8 - 8 = \boxed{\phantom{00}}$

$5 - \boxed{\phantom{00}} = 0$

$20 - \boxed{\phantom{00}} = 4$

$15 - 4 = \boxed{\phantom{00}}$

$19 - 9 = \boxed{\phantom{00}}$

$6 - \boxed{\phantom{00}} = 2$

$18 - \boxed{\phantom{00}} = 11$

$10 - 9 = \boxed{\phantom{00}}$

$16 - 9 = \boxed{\phantom{00}}$

$10 - \boxed{\phantom{00}} = 4$

$13 - \boxed{\phantom{00}} = 10$