

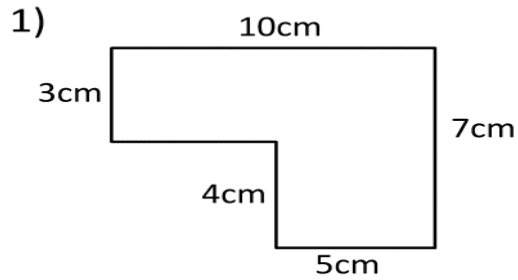
Name

Date



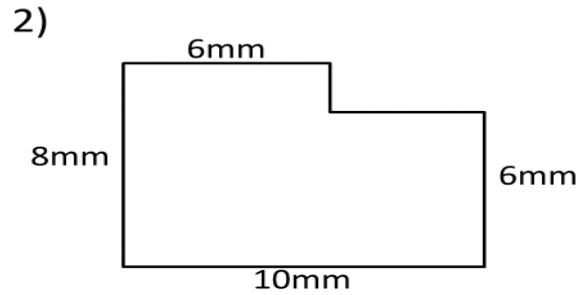
AREA AND PERIMETER SHEET 4

Work out the area and perimeter of the following shapes by finding the missing sides. The shapes are not to scale.



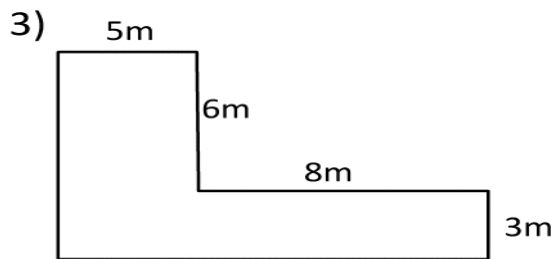
Area = _____ square cm (cm²)

Perimeter = _____ m



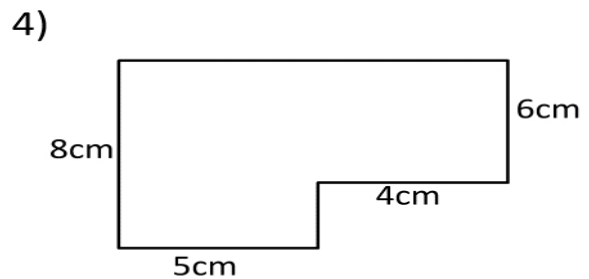
Area = _____ square mm (mm²)

Perimeter = _____ mm



Area = _____ square m (m²)

Perimeter = _____ m



Area = _____ square cm (cm²)

Perimeter = _____ cm