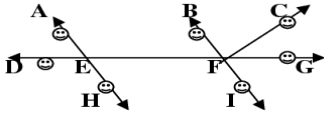






## Pre-Algebra I Chapter 8 Practice Test

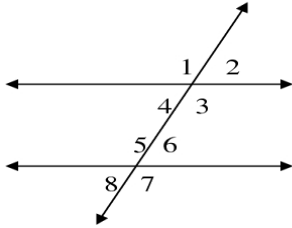


1. Give another name for line FG.
2. Name a line segment that has E as an endpoint.
3. Name a ray that has F as an endpoint.
4. Name two parallel lines.

**Determine whether the angle is obtuse, acute, right, or straight.**

5. 
6. 
7. 
8. 
9. an angle with a measurement of 35 degrees

**Use the following diagram to answer #10-13.**



10. If the measure of angle 6 is 50, find the measure of angle 8.
11. If the measure of angle 8 is 50, find the measure of angle 1.
12. If the measure of angle 3 is 125, find the measure of angle 4.
13. If the measure of angle 4 is 65, find the measure of angle 6.