

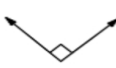

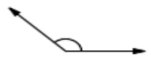
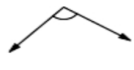








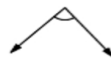
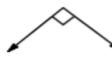


Angles Worksheet ~ Guided Activity

Measure each angle and record your answers.

Classify each angle as acute, obtuse, straight, or right.

1.  _____	2.  _____	3.  _____	4.  _____
5.  _____	6.  _____	7.  _____	8.  _____
9.  _____	10.  _____	11.  _____	12.  _____
13.  _____	14.  _____	15.  _____	16.  _____