




Cards, Triangles, and Patterns

Instructions

For each problem, study the figures and look for a pattern. Then identify the mystery card and record the function. The first problem has been completed for you. Write your rule algebraically using T-map card, L-former left card, and R-former right card.




1.



Prediction: 8

Rule: Top-Left-Right (T-L-R)




2.



Prediction:

Rule:

3.



Prediction:

Rule:

