



# Bats

# in the Barn


I can find the number needed to make 10.




$$\square + \square = 10$$



$$\square + \square = 10$$



$$\square + \square = 10$$



$$\square + \square = 10$$