

Name: \_\_\_\_\_

## Volume

Volume Formulas: cube =  $s^3$




rectangular prism =  $lwh$



cylinder =  $\pi r^2 h$

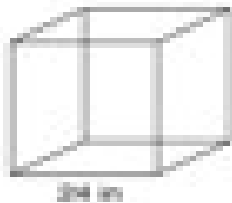


rectangular pyramid =  $\frac{1}{2} lwh$



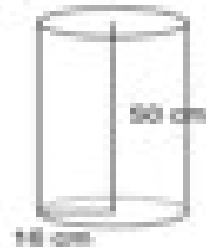
Directions: Find the volume of each shape.

1.



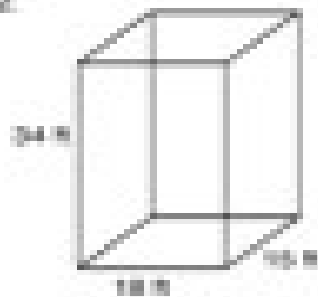
\_\_\_\_\_

3.



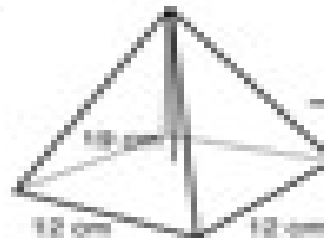
\_\_\_\_\_

2.



\_\_\_\_\_

4.



\_\_\_\_\_