

Name : _____

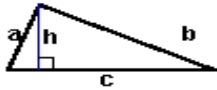
Score : _____

Teacher : _____

Date : _____

Identify and Calculate the Area and Perimeter for each Triangle.

1)



$a = 4.27$ ft $b = 9.21$ ft
 $c = 9.8$ ft $h = 4$ ft

Area: _____

Perimeter: _____

Type: _____

2)



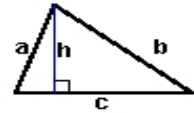
$a = 7.4$ inches $b = 4.8$ inches
 $c = 8.82$ inches

Area: _____

Perimeter: _____

Type: _____

3)



$a = 5.71$ mm $b = 8.49$ mm
 $c = 8.4$ mm $h = 5.4$ mm

Area: _____

Perimeter: _____

Type: _____

4)



$s = 5.9$ yds

Area: _____

Perimeter: _____

Type: _____

5)



$a = 8.6$ ft $b = 4.3$ ft
 $c = 9.62$ ft

Area: _____

Perimeter: _____

Type: _____

6)



$a = 4.5$ cm $b = 6.4$ cm

Area: _____

Perimeter: _____

Type: _____

7)



$a = 6.33$ yds $b = 8.16$ yds
 $c = 8.6$ yds $h = 5.7$ yds

Area: _____

Perimeter: _____

Type: _____

8)



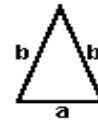
$a = 8.2$ cm $b = 5$ cm
 $c = 9.6$ cm

Area: _____

Perimeter: _____

Type: _____

9)



$a = 4$ inches $b = 6.7$ inches

Area: _____

Perimeter: _____

Type: _____